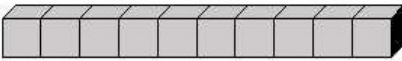
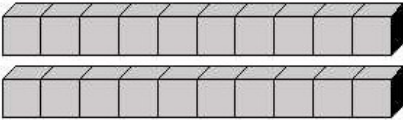
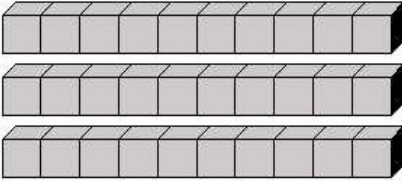
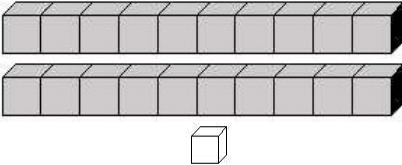
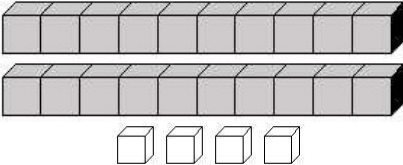
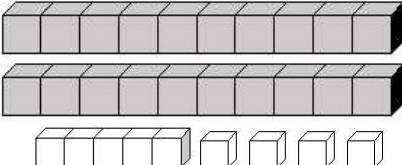
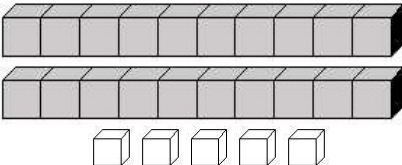
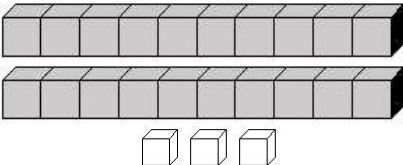
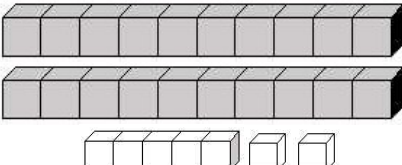
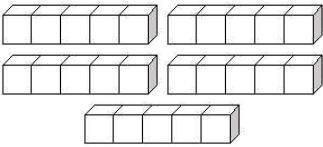
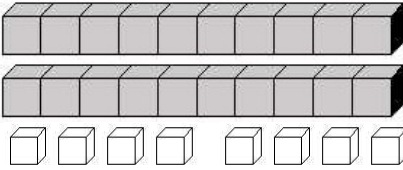
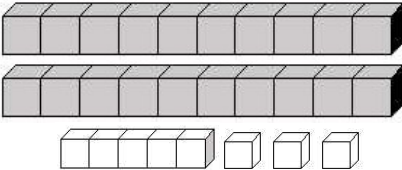
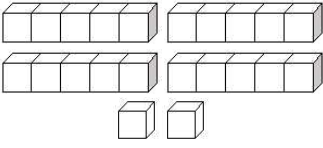
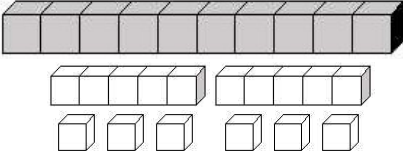
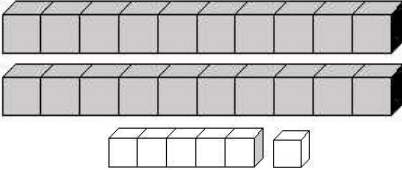


COMPTER	Kontañ 'ran betek... 30 <small>(02)</small>
----------------	--

• Kloka an toulloù :

1	4	8	10
11	14	18	20
21	24	28	30

• Kont ar c'huboù ha kelc'hiañ an niver mat :

 10 20 30	 10 20 30	 10 20 30
 21 12 11	 24 23 22	 26 29 25
 25 30 15	 24 23 22	 17 27 23
 20 25 30	 28 27 29	 29 27 28
 22 12 6	 25 26 27	 25 26 27