

Prénom : .....

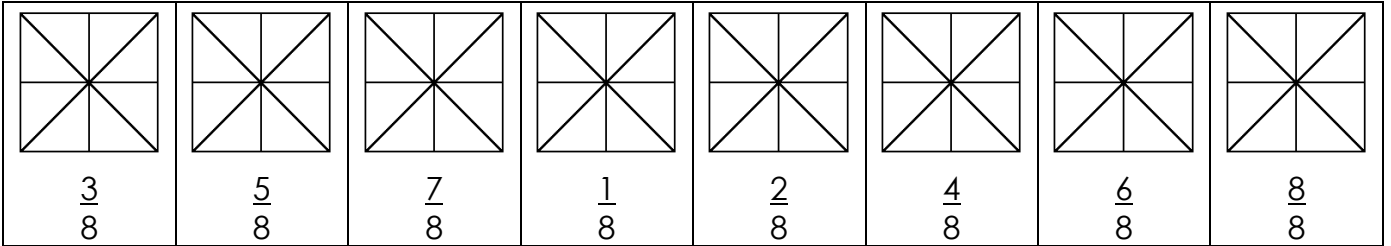
Date : .....




# NUMÉRATION

Les fractions (04)


1./ Colorie la partie demandée de chacune de ces figures :



2./ Indique la fraction de la partie totale qui est coloriée et simplifie si possible :




$$: \frac{10}{16} = \frac{5}{8}$$





$$: \frac{\dots}{\dots} = \frac{\dots}{\dots}$$


$$\frac{\dots}{\dots} = \frac{\dots}{\dots} :$$



$$\frac{\dots}{\dots} = \frac{\dots}{\dots} :$$

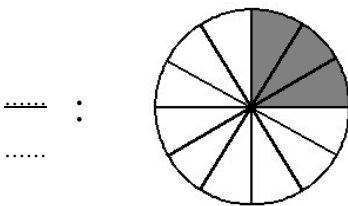


$$: \frac{\dots}{\dots} = \frac{\dots}{\dots}$$

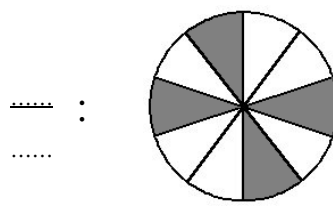


$$: \frac{\dots}{\dots} = \frac{\dots}{\dots}$$

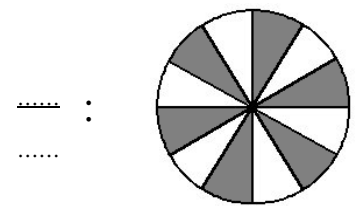
3./ Indique la fraction de la partie totale qui est coloriée et simplifie directement :



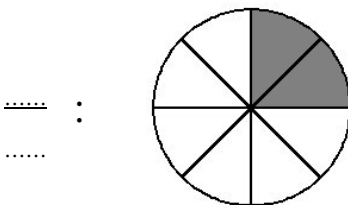
$$\frac{\dots}{\dots} :$$



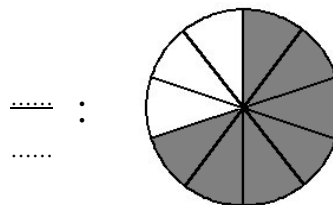
$$\frac{\dots}{\dots} :$$



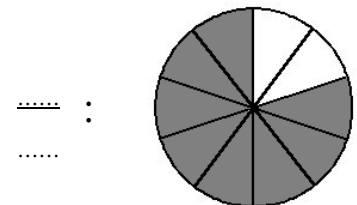
$$\frac{\dots}{\dots} :$$



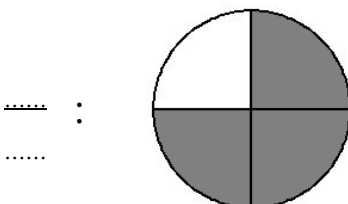
$$\frac{\dots}{\dots} :$$



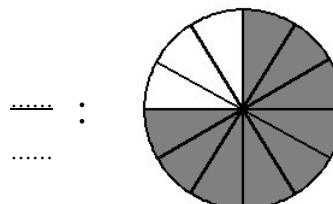
$$\frac{\dots}{\dots} :$$



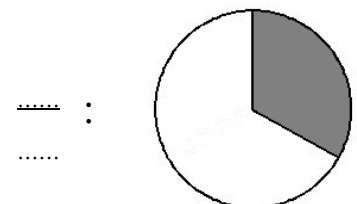
$$\frac{\dots}{\dots} :$$



$$\frac{\dots}{\dots} :$$



$$\frac{\dots}{\dots} :$$



$$\frac{\dots}{\dots} :$$