

Prénom : .....

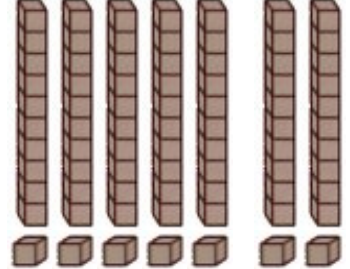
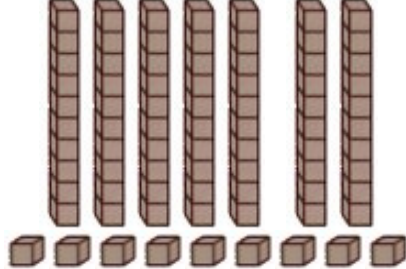
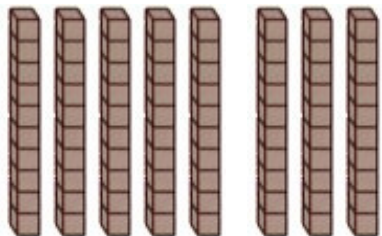
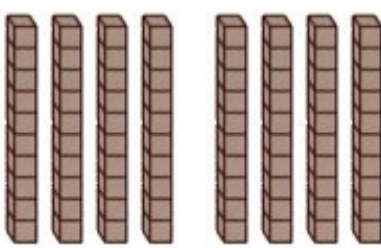
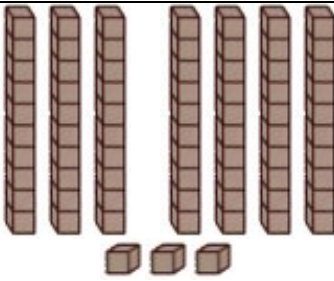
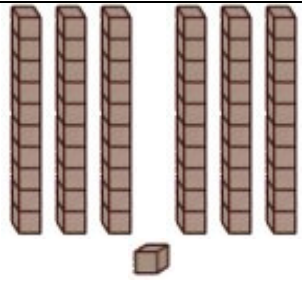
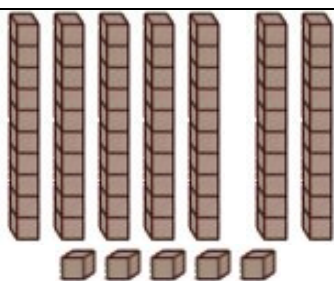
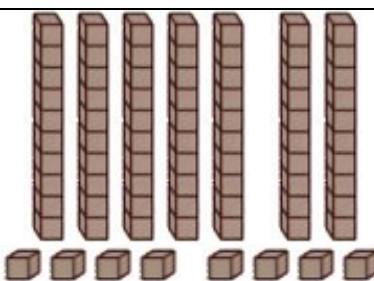
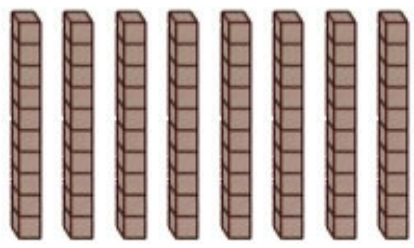
Date : .....

<b>COMPTER</b>	<b>Je compte jusqu'à... 80</b> <small>(02)</small>
----------------	----------------------------------------------------

- Complète la suite numérique de 1 à 80 :

1	2	3	4	5	6	7	8	9	10
11	.....	13	.....	15	.....	.....	18	.....	20
21	22	23	24	25	26	27	28	29	30
31	.....	33	.....	35	.....	.....	38	.....	40
41	42	43	44	45	46	47	48	49	50
51	.....	53	.....	55	.....	.....	58	.....	60
61	62	63	64	65	66	67	68	69	70
71	.....	73	.....	75	.....	.....	78	.....	80

- Combien y a-t-il de cubes dans les cases suivantes ?

 <b>55 66 77</b>	 <b>59 79 69</b>	 <b>60 70 80</b>
 <b>80 70 60</b>	 <b>73 63 43</b>	 <b>71 61 16</b>
 <b>75 65 55</b>	 <b>74 58 78</b>	 <b>60 80 70</b>

- Observe et complète :

▶	35	40	45	.....	55	.....	.....	.....	.....	80
---	----	----	----	-------	----	-------	-------	-------	-------	----