

Prénom : .....

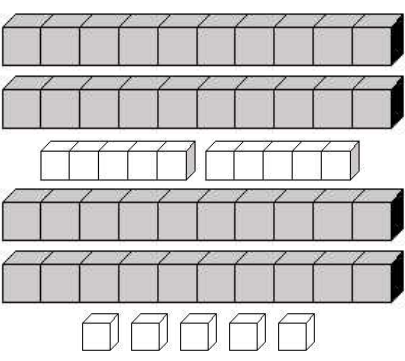
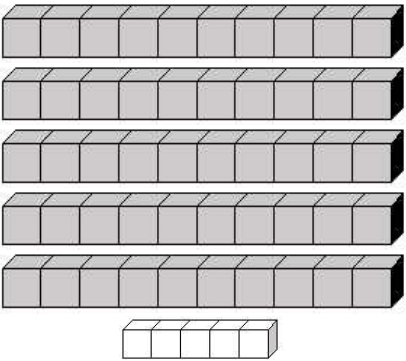

Date : .....

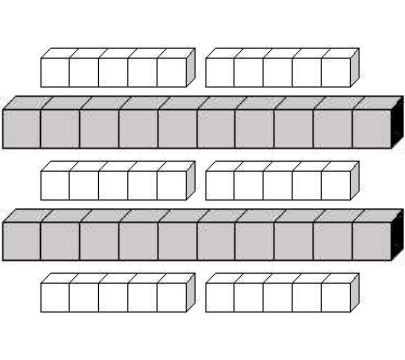
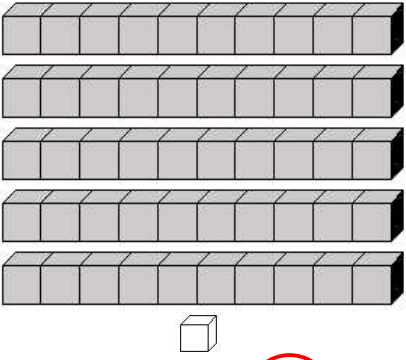
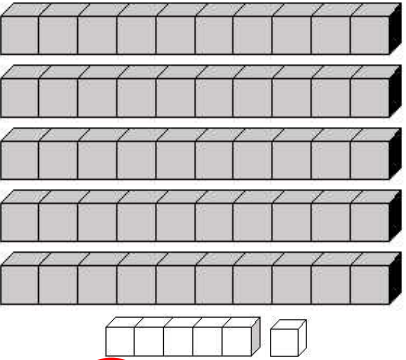
<b>COMPTER</b>	<b>Je compte jusqu'à... 60</b> <small>(02)</small>
----------------	--

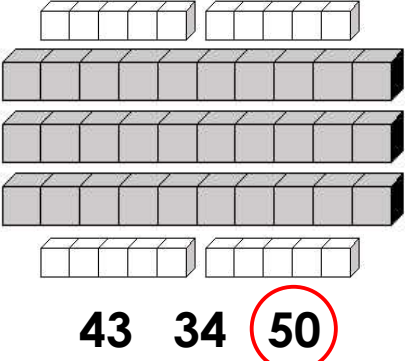
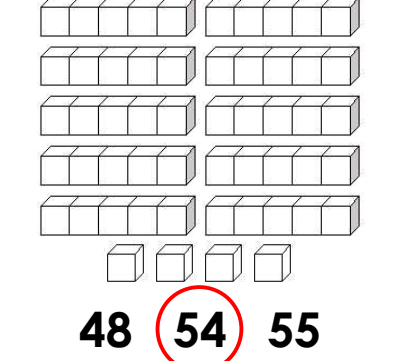
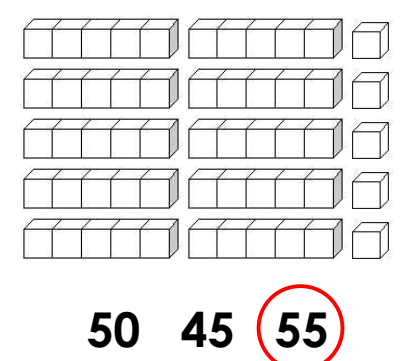
• Complète la suite numérique de 1 à 60 :

1	2	3	4	5	6	7	8	9	10
11	12	13	14	15	16	17	18	19	20
21	22	23	24	25	26	27	28	29	30
31	32	33	34	35	36	37	38	39	40
41	42	43	44	45	46	47	48	49	50
51	52	53	54	55	56	57	58	59	60

• Combien y a-t-il de cubes dans les cases suivantes :

 <b>55</b> 50 45	 50 <b>55</b> 60	 <b>60</b> 16 06
---	--	---

 40 <b>50</b> 60	 41 15 <b>51</b>	 <b>56</b> 55 57
--	---	--

 43 34 <b>50</b>	 48 <b>54</b> 55	 50 45 <b>55</b>
--	---	--