

Prénom :

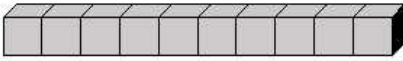
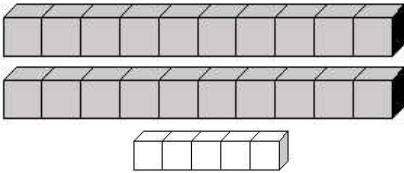
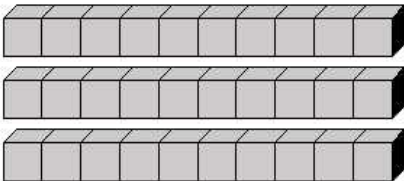
Date :

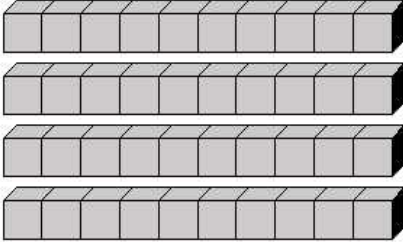
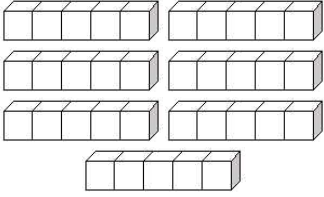
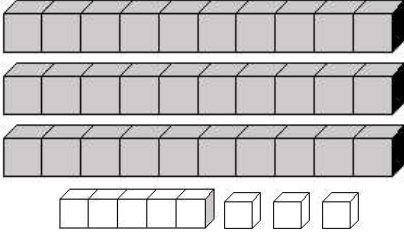
COMPTER	Je compte jusqu'à... 40 <small>(03)</small>
----------------	--

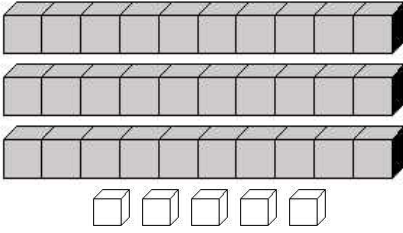
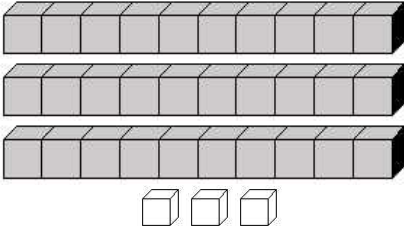
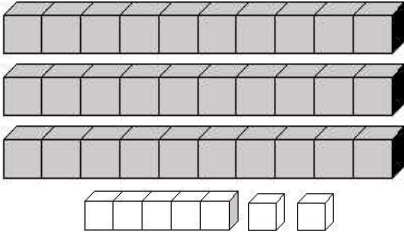
- Complète la suite numérique de 1 à 40 :

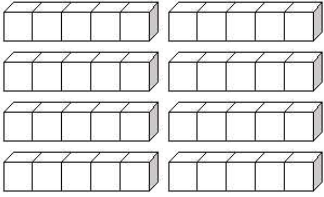
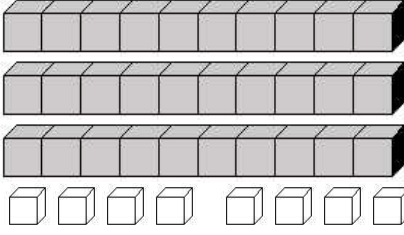
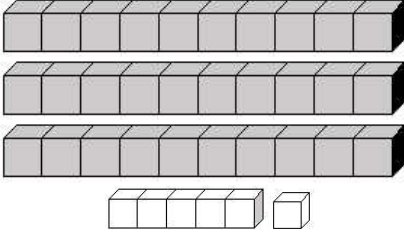
1	2	3	4	5	6	7	8	9	10
11	12	13	14	15	16	17	18	19	20
21	22	23	24	25	26	27	28	29	30
31	32	33	34	35	36	37	38	39	40

- Combien y a-t-il de cubes dans les cases suivantes ?

 <p style="color: red; font-size: 24px;">10</p>	 <p style="color: red; font-size: 24px;">25</p>	 <p style="color: red; font-size: 24px;">30</p>
---	---	---

 <p style="color: red; font-size: 24px;">40</p>	 <p style="color: red; font-size: 24px;">35</p>	 <p style="color: red; font-size: 24px;">38</p>
---	---	---

 <p style="color: red; font-size: 24px;">35</p>	 <p style="color: red; font-size: 24px;">33</p>	 <p style="color: red; font-size: 24px;">37</p>
---	---	---

 <p style="color: red; font-size: 24px;">40</p>	 <p style="color: red; font-size: 24px;">38</p>	 <p style="color: red; font-size: 24px;">36</p>
---	---	---