

Prénom :




Date :



LES LONGUEURS




Les unités de longueur – Exercices (02)

1./ Quelle est la mesure des segments suivants ?



[AB] 6 cm et 5 mm	[CD] 7 cm et 5 mm	[EF] 8 cm et 5 mm	[GH] 5 cm et 5 mm	[IJ] 10 cm et 5 mm
----------------------	----------------------	----------------------	----------------------	-----------------------

2./ Quelle est la mesure des segments suivants ?



[KL] 5 cm 3 mm	[MN] 8 cm 7 mm	[OP] 6 cm 8 mm	[QR] 8 cm 0 mm	[ST] 11 cm 2 mm
-------------------	-------------------	-------------------	-------------------	--------------------

3./ Ordonne ces 10 segments du plus grand au plus petit :

ST	IJ	MN	EF	QR	CD	OP	AB	GH	KL
----	----	----	----	----	----	----	----	----	----