

Prénom :




Date :



LES LONGUEURS



Les unités de longueur – Exercices (01)

1./ Quelle est la mesure des segments suivants ?



[AB] 5 cm	[CD] 8 cm	[EF] 7 cm	[GH] 6 cm	[IJ] 9 cm
--------------	--------------	--------------	--------------	--------------

2./ Quelle est la mesure des segments suivants ?



[KL] 3 cm 5 mm	[MN] 6 cm 5 mm	[OP] 4 cm 5 mm	[QR] 2 cm 5 mm	[ST] 8 cm 5 mm
-------------------	-------------------	-------------------	-------------------	-------------------

3./ Ordonne ces 10 segments du plus petit au plus grand :

QR	KL	OP	AB	GH	MN	EF	CD	ST	IJ
----	----	----	----	----	----	----	----	----	----