





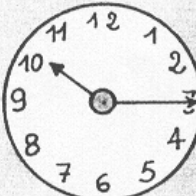

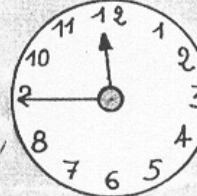








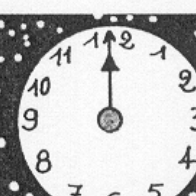
Prénom :

Date :

MESURE

Lire l'heure... (T-03)

- Le déroulement d'une **journée** :

			
00 : 00	03 : 00	04 : 30	06 : 00
il est minuit	il est 3 heures du matin	il est 4 heures et demie du matin	il est 6 heures du matin
			
10 : 15	11 : 00	11 : 45	12 : 00
il est 10 heures et quart	il est onze heures	il est midi moins le quart	il est midi
			
15 : 00	16 : 00	17 : 45	19 : 00
il est 3 heures de l'après-midi	il est 4 heures	il est 6 heures moins le quart	il est sept heures
			
21 : 00	22 : 30	23 : 00	00 : 00
il est 9 heures du soir	il est 10 heures et demie du soir	il est 11 heures du soir	il est minuit