




• Trace les 2 aiguilles sur les horloges suivantes :




12 h 25 min




13 h 40 min




16 h 50 min




6 h 5 min




8 : 15



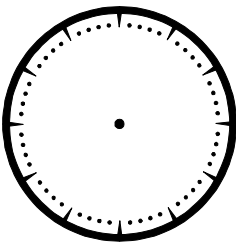
17 : 49



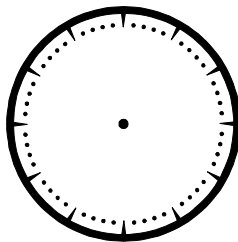
22 : 55



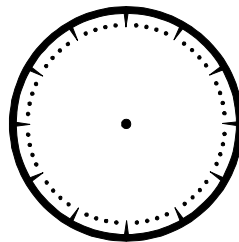
0 : 34



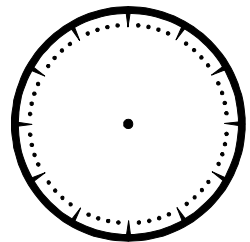
9 : 20



14 : 02




18 : 30




21 : 21


• Quelle heure est-il ? (Entoure la bonne réponse)




22 h 15    9 h 15




14 h 45    2 h 09




7 h 30    19 h 06




4 h 00    16 h 03




10 : 02    22 : 10



17 : 48    6 : 10



2 : 17    19 : 13



12 : 58    00 : 00