

# MESURE

# Lire l'heure... (08)





• Relie les heures identiques :

17 : 00

8 : 00

15 : 00

22 : 00



5 : 00

20 : 00

10 : 00





3 : 00

12 : 30

0 : 15

13 : 50

10 : 10




12 : 15

0 : 30

22 : 10

1 : 50


• Quelle heure est-il ?



8 : 00

ou


20 : 00



..... : .....

ou


..... : .....



..... : .....

ou


..... : .....



..... : .....

ou


..... : .....



..... : .....

ou


..... : .....



..... : .....

ou


..... : .....



..... : .....

ou

..... : .....



..... : .....

ou

..... : .....