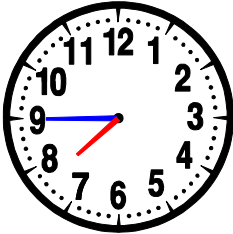


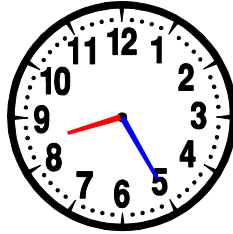
MESURE

Lire l'heure... (07)


• Quelle heure est-il ?




07 : 45
OU
19 : 45




..... :



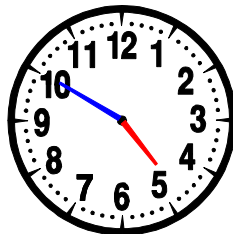
..... :




..... :




..... :



..... :

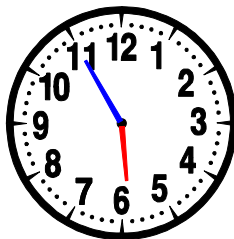


..... :




..... :

• Entoure la bonne heure :



06 : 55
05 : 55


11 : 30
06 : 11




02 : 08
02 : 40

13 : 40
13 : 08


• Dessine les aiguilles des horloges suivantes :




08 : 20



14 : 10



11 : 15



21 : 37