

Prénom : .....

Date : .....

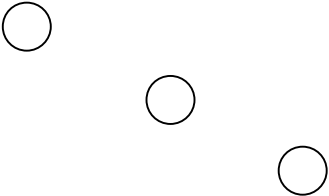


# COMPTER

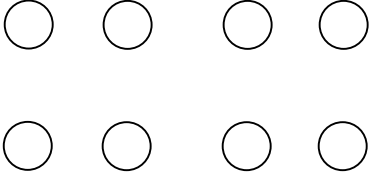

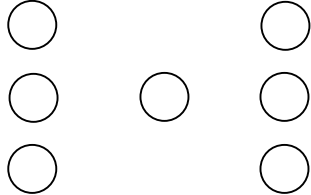
# Je compte jusqu'à... 10 (07)


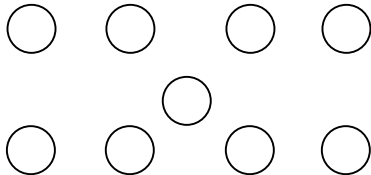

- Complète la suite numérique de 0 à 10 :


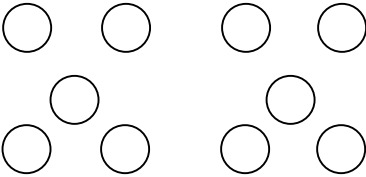
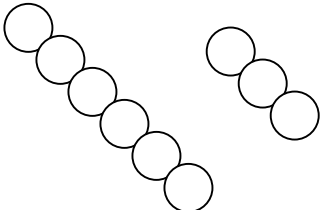
0	1	2	3	4	5	6	7	8	9	10
---	---	---	---	---	---	---	---	---	---	----

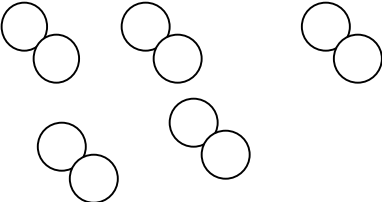
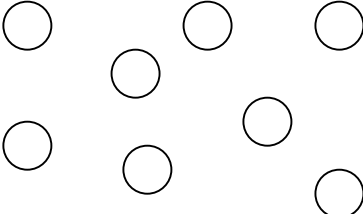
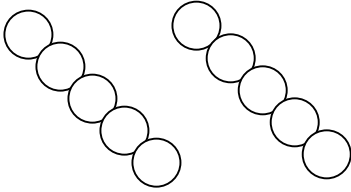
- Combien y a-t-il de cercles dans les cases suivantes ? (Entoure la bonne réponse)

 2 <b>3</b> 4	 2 3 <b>4</b>	 4 5 <b>6</b>
---------------------------------------------------------------------------------------------------	---------------------------------------------------------------------------------------------------	-----------------------------------------------------------------------------------------------------

 9 <b>8</b> 10	 7 <b>5</b> 9	 <b>7</b> 5 9
-----------------------------------------------------------------------------------------------------	----------------------------------------------------------------------------------------------------	------------------------------------------------------------------------------------------------------

 <b>0</b> 1 10	 8 <b>9</b> 10	 <b>1</b> 2 3
------------------------------------------------------------------------------------------------------	------------------------------------------------------------------------------------------------------	-------------------------------------------------------------------------------------------------------

 <b>2</b> 3 4	 0 5 <b>10</b>	 8 <b>9</b> 10
-----------------------------------------------------------------------------------------------------	------------------------------------------------------------------------------------------------------	--------------------------------------------------------------------------------------------------------

 8 9 <b>10</b>	 10 <b>8</b> 9	 <b>10</b> 9 8
------------------------------------------------------------------------------------------------------	------------------------------------------------------------------------------------------------------	--------------------------------------------------------------------------------------------------------