


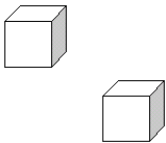
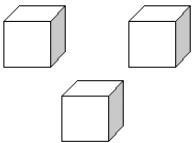
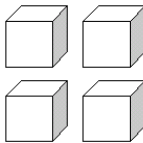
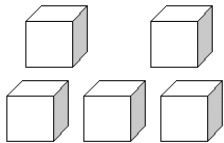
Prénom : .....

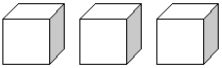
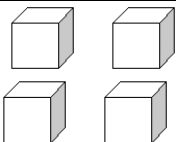
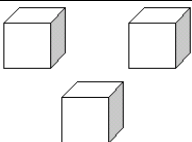
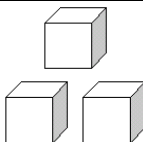
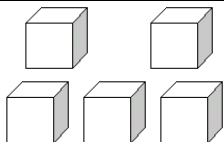
Date : .....

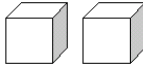
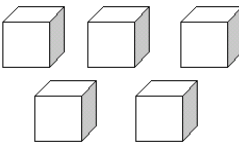
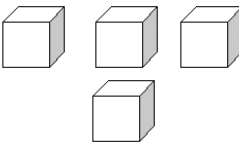

**COMPTER**


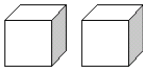
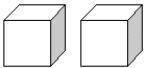
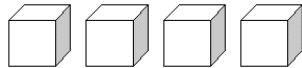
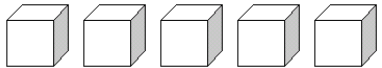
# Je compte jusqu'à... 5 (02)

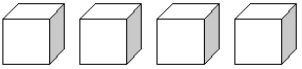
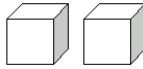
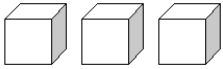

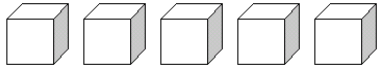
• **Combien y a-t-il de cubes ?**


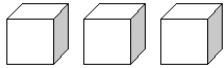
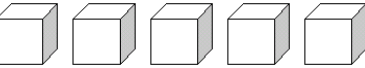
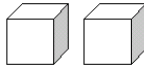
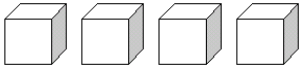
 <b>1</b>	 <b>2</b>	 <b>3</b>	 <b>4</b>	 <b>5</b>
---	---	---	---	---

 <b>3</b>	 <b>4</b>	 <b>3</b>	 <b>3</b>	 <b>5</b>
---	---	---	---	---

 <b>2</b>	 <b>5</b>	 <b>4</b>	 <b>1</b>	<b>0</b>
---	--	--	---	----------

<b>0</b>	 <b>1</b>	 <b>2</b>	 <b>3</b>	 <b>4</b>	 <b>5</b>
----------	---	---	---	--	---

 <b>4</b>	 <b>2</b>	 <b>3</b>	 <b>1</b>	<b>0</b>	 <b>5</b>
---	---	---	---	----------	---

 <b>1</b>	 <b>3</b>	 <b>5</b>	<b>0</b>	 <b>2</b>	 <b>4</b>
---	---	---	----------	--	---

• **Dessine le nombre de cercles :**

3 ○ ⇒ ○ ○ ○	1 ○ ⇒ ○
2 ○ ⇒ ○ ○	4 ○ ⇒ ○ ○ ○ ○
5 ○ ⇒ ○ ○ ○ ○ ○	0 ○ ⇒