

	<h1 style="margin: 0;">LES OPÉRATIONS</h1> <p style="color: red; font-size: small;">(07)</p>
---	--






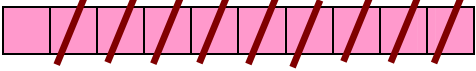

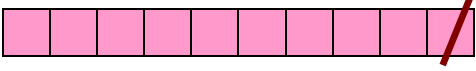
• Entoure le bon résultat :

<u>8 + 1</u>	<u>8 - 1</u>	<u>7 + 2</u>	<u>9 - 3</u>	<u>6 + 4</u>
8	8	8	5	10
9	9	9	3	9
10	7	10	6	8
<u>5 + 5</u>	<u>5 - 5</u>	<u>7 + 3</u>	<u>8 - 0</u>	<u>1 + 9</u>
5	0	10	8	8
10	5	9	9	10
15	10	8	10	19

• Entoure la bonne opération :

<u>8</u>	<u>8</u>	<u>8</u>	<u>8</u>	<u>8</u>
1 + 5	10 - 3	5 - 5	7 + 1	10 - 1
2 + 5	10 - 2	10 - 5	1 + 6	9 - 1
3 + 5	10 - 4	4 + 4	7 - 1	5 + 5
<u>10</u>	<u>10</u>	<u>10</u>	<u>10</u>	<u>10</u>
6 + 3	9 + 1	4 + 2 + 3	2 + 4 + 2	10 - 5
5 + 4	8 + 1	1 + 4 + 4	4 + 2 + 4	15 - 5
4 + 6	7 + 2	3 + 7 + 0	3 + 2 + 3	20 - 5

• Complète suivant les exemples :

 $3 + 6 = 9$	$\begin{array}{r} 3 \\ + 6 \\ \hline 9 \end{array}$	 $10 - 7 = 3$	$\begin{array}{r} 10 \\ - 7 \\ \hline 3 \end{array}$
 $2 + 8 = \dots$	$\begin{array}{r} 2 \\ + 8 \\ \hline 10 \end{array}$	 $10 - 8 = \dots$	$\begin{array}{r} 10 \\ - 8 \\ \hline 2 \end{array}$
 $6 + \dots = 10$	$\begin{array}{r} 6 \\ + 4 \\ \hline 10 \end{array}$	 $10 - \dots = 1$	$\begin{array}{r} 10 \\ - 9 \\ \hline 1 \end{array}$
 $1 + \dots = 10$	$\begin{array}{r} 1 \\ + 9 \\ \hline 10 \end{array}$	 $10 - \dots = 9$	$\begin{array}{r} 10 \\ - 1 \\ \hline 9 \end{array}$