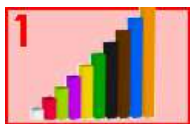


Prénom : .....







Date : .....



# Apprendre à compter

Compter jusqu'à 5

1./ Cherche toutes les solutions différentes pour obtenir 5 avec 1, 2, 3, 4 ou 5 réglettes :



2./ Écris toutes les solutions trouvées sous forme d'addition :

1./  $2 + 1 + 2$

2./ .....

3./ .....

4./ .....

5./ .....

6./ .....

7./ .....

8./ .....

9./ .....

10./ .....

11./ .....

12./ .....

13./ .....

14./ .....

15./ .....

16./ .....

17./ .....

18./ .....

3./ Recopie toutes les additions qui n'ont que 2 termes (4 solutions) :

.....  
.....