

Prénom :

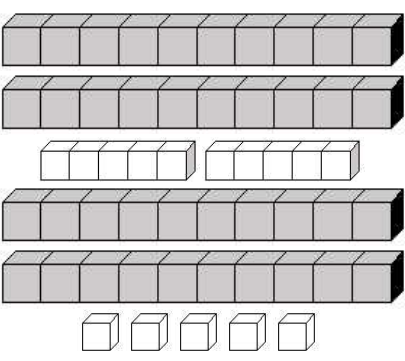
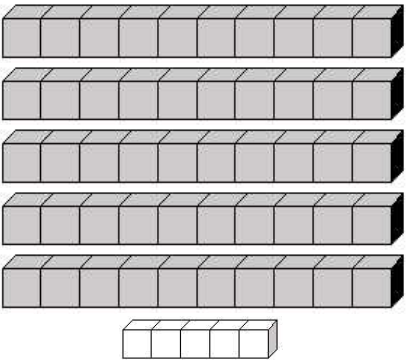

Date :

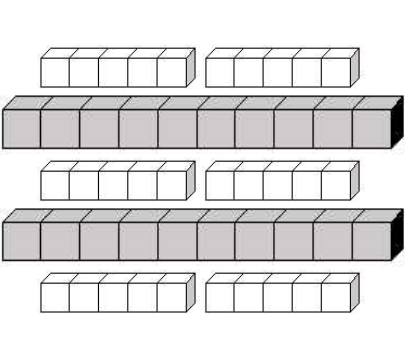
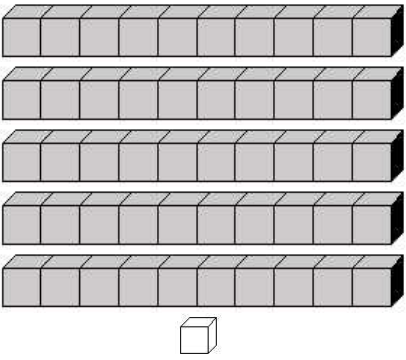
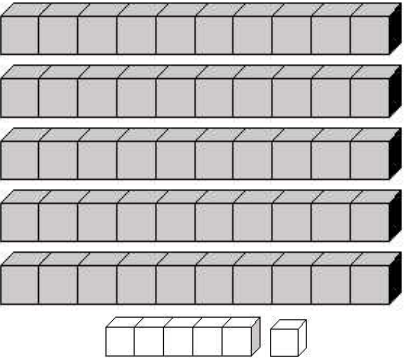
| | |
|----------------|--|
| COMPTER | Je compte jusqu'à... 60 <small>(02)</small> |
|----------------|--|

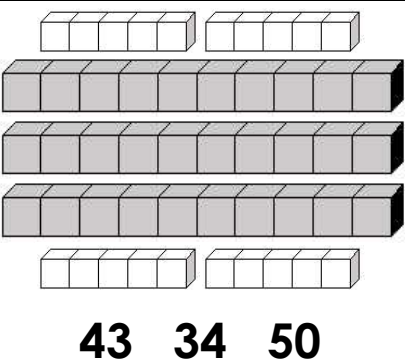
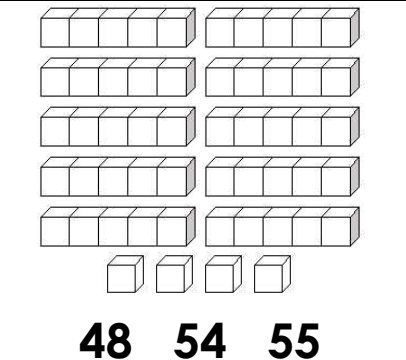
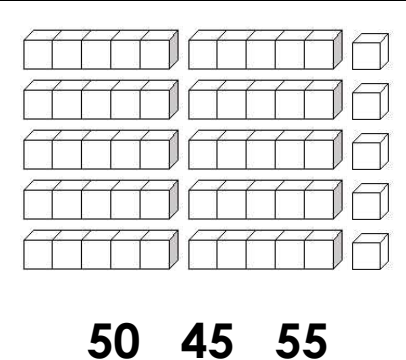
• Complète la suite numérique de 1 à 60 :

| | | | | | | | | | |
|-----------|-------|-----------|-------|-----------|-------|-----------|-----------|-------|-----------|
| 1 | | 3 | | 5 | | 7 | | | 10 |
| 11 | | 13 | | 15 | | | 18 | | 20 |
| 21 | | 23 | | 25 | | 27 | | | 30 |
| 31 | | 33 | | 35 | | | 38 | | 40 |
| 41 | | 43 | | 45 | | 47 | | | 50 |
| 51 | | 53 | | 55 | | | 58 | | 60 |

• Combien y a-t-il de cubes dans les cases suivantes :

| | | |
|---|--|---|
|  <p>55 50 45</p> |  <p>50 55 60</p> |  <p>60 16 06</p> |
|---|--|---|

| | | |
|--|---|--|
|  <p>40 50 60</p> |  <p>41 15 51</p> |  <p>56 55 57</p> |
|--|---|--|

| | | |
|--|---|--|
|  <p>43 34 50</p> |  <p>48 54 55</p> |  <p>50 45 55</p> |
|--|---|--|