

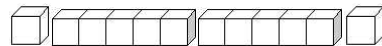
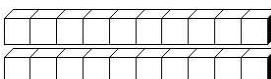
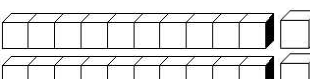
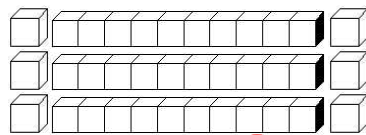
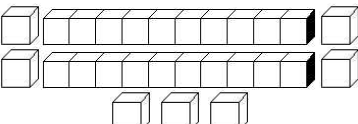
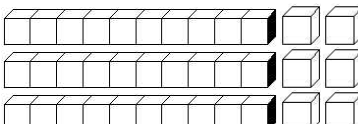
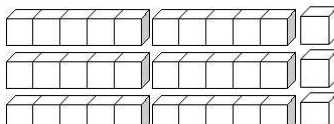
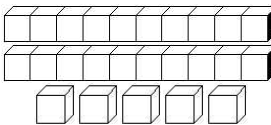
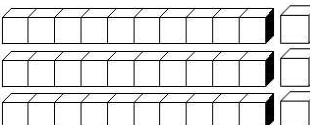
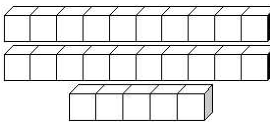
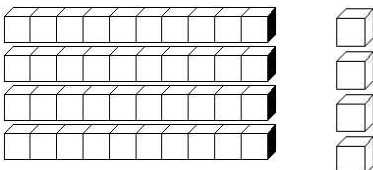
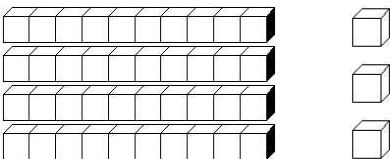
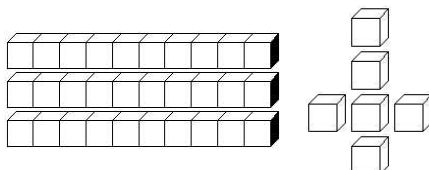
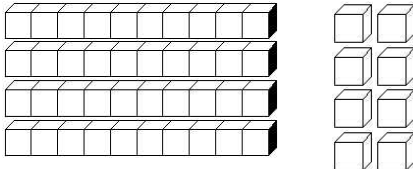
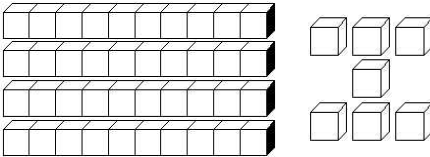
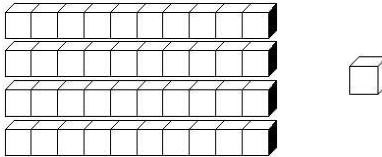
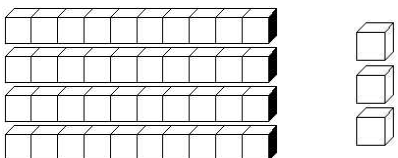
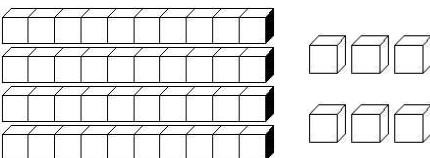
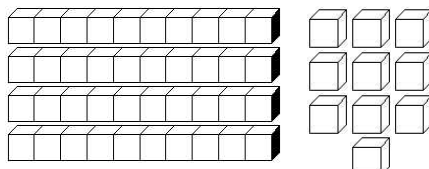


Prénom : .....

Date : .....

**COMPTER** **Je compte jusqu'à... 50** (03)

• **Combien y a-t-il de cubes ? (Entoure la bonne réponse)**

 10 <b>13</b> 15	 <b>6</b> 5 7	 10 11 <b>12</b>
 <b>20</b> 21 22	 <b>22</b> 23 24	 33 26 <b>36</b>
 25 26 <b>27</b>	 32 34 <b>36</b>	 <b>33</b> 55 44
 23 24 <b>25</b>	 <b>33</b> 34 35	 23 24 <b>25</b>
 <b>44</b> 33 50	 35 53 <b>43</b>	 34 <b>36</b> 37
 38 <b>48</b> 18	 43 45 <b>47</b>	 <b>41</b> 16 14
 34 <b>43</b> 47	 <b>46</b> 48 50	 40 <b>50</b> 60

• **Range du plus GRAND au plus PETIT :**

35	<b>25</b>	45	33	30	<b>50</b>	40	47	29	39
▶ <b>50</b>	<b>47</b>	<b>45</b>	<b>40</b>	<b>39</b>	<b>35</b>	<b>33</b>	<b>30</b>	<b>29</b>	<b>25</b>