



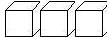
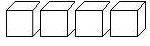
Prénom :


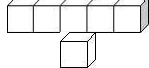
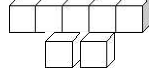
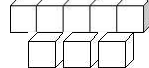
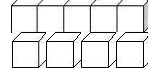
Date :

COMPTER

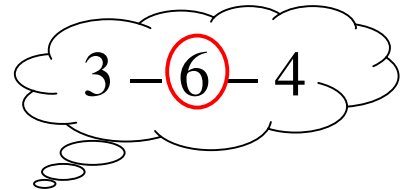
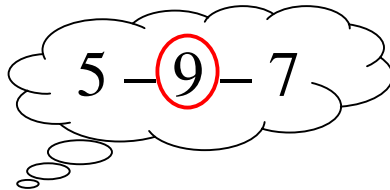
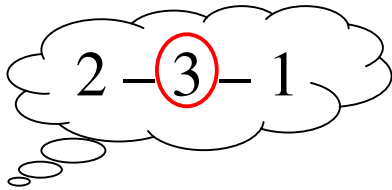
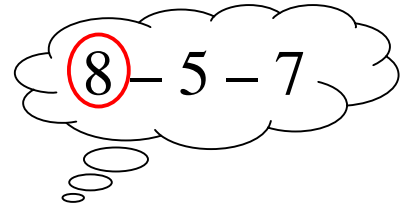
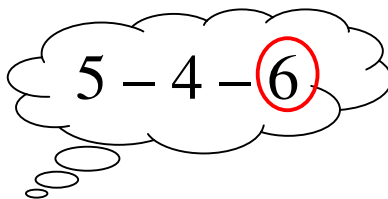
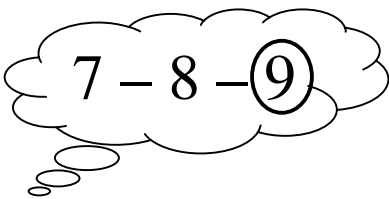
Je compte jusqu'à... 9 (01)

- Complète le tableau suivant :

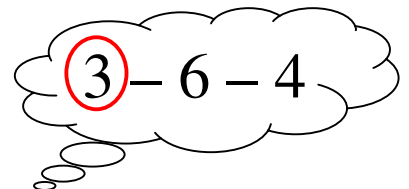
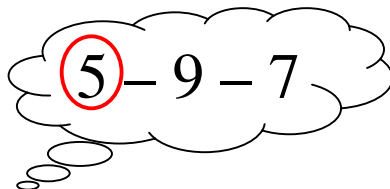
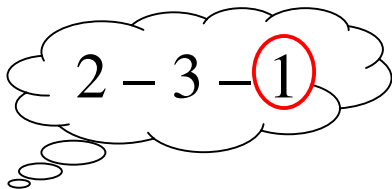
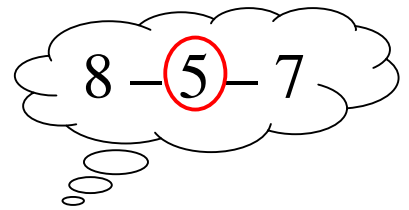
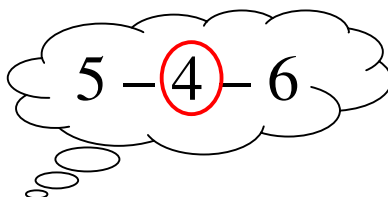
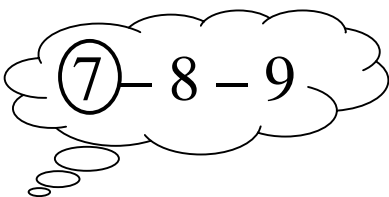
| | | | | |
|---|-----------------------------------------------------------------------------------|-----------------------------------------------------------------------------------|-------------------------------------------------------------------------------------|-------------------------------------------------------------------------------------|
| |  |  |  |  |
| 0 | 1 | 2 | 3 | 4 |

| | | | | |
|-----------------------------------------------------------------------------------|-----------------------------------------------------------------------------------|-----------------------------------------------------------------------------------|------------------------------------------------------------------------------------|-------------------------------------------------------------------------------------|
|  |  |  |  |  |
| 5 | 6 | 7 | 8 | 9 |

- Entoure le plus GRAND des trois nombres :



- Entoure le plus PETIT des trois nombres :



- Range ces nombres du plus petit au plus grand :

| | | | | | | | | | |
|---|---|--------------|---|---|--------------|---|---|--------------|---|
| 2 | 7 | 5 | 3 | 6 | 0 | 1 | 4 | 9 | 8 |
| 0 | 1 | 2 | 3 | 4 | 5 | 6 | 7 | 8 | 9 |