






Prénom :



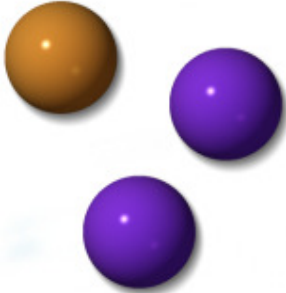

Date :

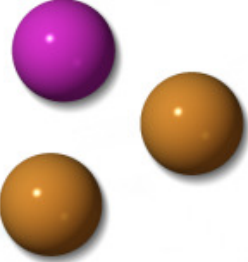

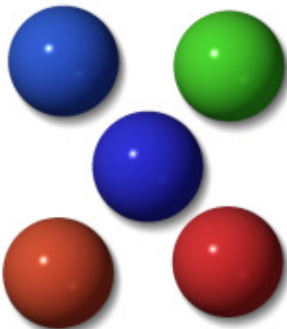

COMPTER

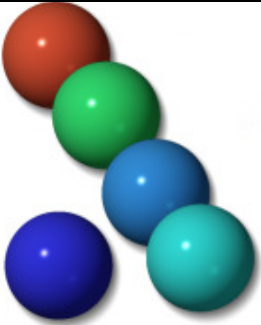
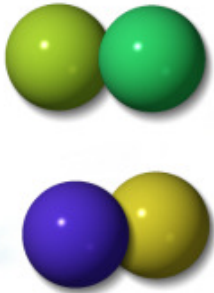
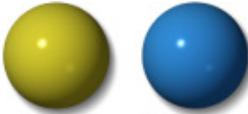

Je compte jusqu'à... 5 (06)

5	4	3	2	1	0
					

• Combien y a-t-il de billes ? (Entoure la bonne réponse)

 <input type="checkbox"/> 0 <input checked="" type="checkbox"/> 2 <input type="checkbox"/> 4	 <input type="checkbox"/> 0 <input type="checkbox"/> 2 <input checked="" type="checkbox"/> 4	 <input type="checkbox"/> 1 <input checked="" type="checkbox"/> 3 <input type="checkbox"/> 5	 <input checked="" type="checkbox"/> 1 <input type="checkbox"/> 3 <input type="checkbox"/> 5
--	--	---	--

 <input type="checkbox"/> 1 <input checked="" type="checkbox"/> 3 <input type="checkbox"/> 5	 <input checked="" type="checkbox"/> 0 <input type="checkbox"/> 2 <input type="checkbox"/> 4	 <input checked="" type="checkbox"/> 5 <input type="checkbox"/> 3 <input type="checkbox"/> 1	 <input type="checkbox"/> 4 <input checked="" type="checkbox"/> 2 <input type="checkbox"/> 0
--	--	---	--

 <input checked="" type="checkbox"/> 5 <input type="checkbox"/> 4 <input type="checkbox"/> 3	 <input type="checkbox"/> 3 <input checked="" type="checkbox"/> 4 <input type="checkbox"/> 5	 <input type="checkbox"/> 3 <input checked="" type="checkbox"/> 2 <input type="checkbox"/> 1	 <input type="checkbox"/> 3 <input type="checkbox"/> 4 <input checked="" type="checkbox"/> 5
--	--	---	--